


Tables

1 Use the picture to complete the tally chart.

Animal	Tally	Frequency
Cat		
Dog		
Rabbit		



How many more dogs are there than rabbits?




1 mark

1 mark


2 Harry counted the numbers of different birds in his back garden.

Complete Harry's table.



Bird	Tally	Frequency
blackbird		6
crow	 	9
sparrow		
starling	 	

What was the total number of birds?

 birds

1 mark


1 mark

3 Rachel records the colours of the cars that pass her school.

Here are her results.

blue red blue silver red blue silver red blue red
red red blue silver red silver blue blue silver red

Construct and label a tally chart to present this information.



1 mark

"I can interpret and present data using tables."

