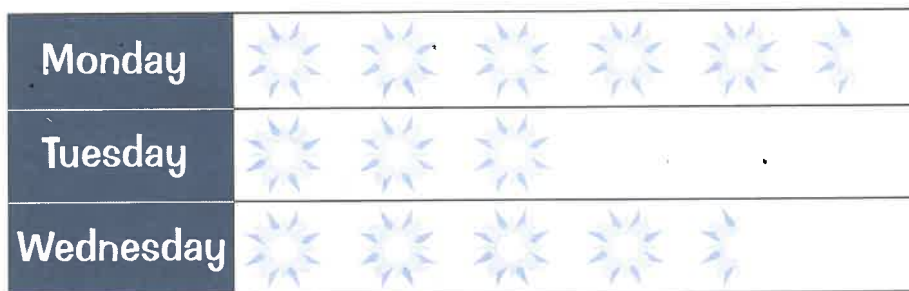


Pictograms

Q1 My friend drinks several bottles of "Sunny Squeeze" orange juice a day. This pictogram shows how many.



 stands for 2 bottles




a) How many bottles did he drink on Wednesday?


.....

b) On which day did he drink the most juice?

.....

Q2 This pictogram shows how many crocodiles I found in two weeks.



 stands for 4 crocodiles

a) How many crocodiles did I find last week?

.....

b) How many more crocodiles did I find this week compared to last week?

.....